





Subtract within 5


Instruction: Solve each subtraction. Write the answer in the box.


 $2 - 1 = \square$


 $4 - 4 = \square$


 $4 - 2 = \square$


 $5 - 2 = \square$


 $3 - 1 = \square$


 $5 - 1 = \square$


 $3 - 2 = \square$

 $5 - 3 = \square$

 $4 - 1 = \square$

 $5 - 4 = \square$

 $4 - 3 = \square$

 $5 - 5 = \square$