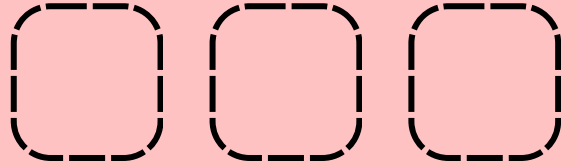
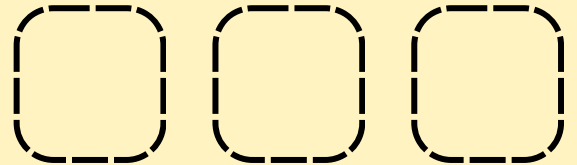


Subtract and Draw

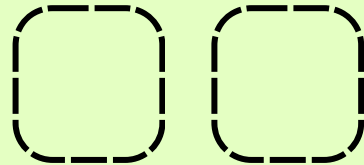

Instruction: Count what is left. Draw the remaining objects in the box.



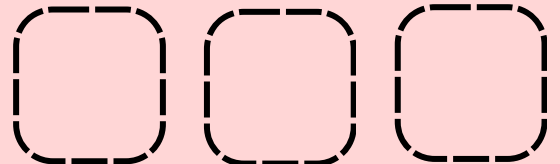
$$5 - 2 = \underline{\quad}$$



$$6 - 3 = \underline{\quad}$$



$$4 - 2 = \underline{\quad}$$



$$5 - 1 = \underline{\quad}$$

