


Count the Sides

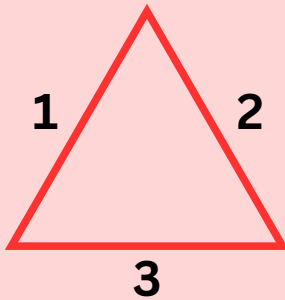
Instruction: Count the sides of each shape. Write the number in the box.

How many sides?



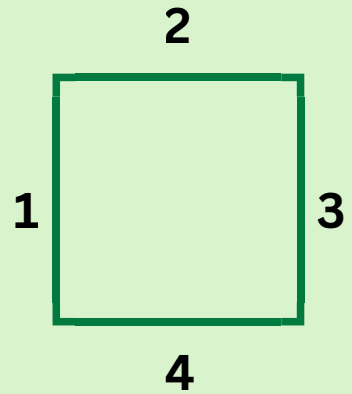
Circle
No straight lines

How many sides?



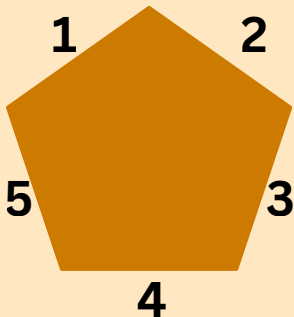
Triangle
All 3 sides are equal

How many sides?



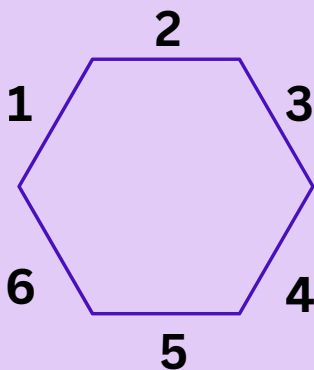
Square
All 4 sides are equal

How many sides?



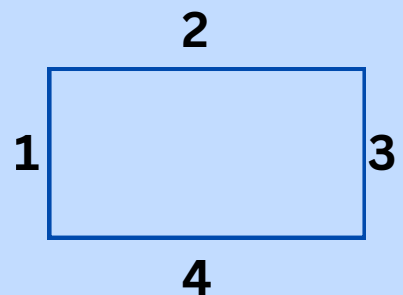
Pentagon

How many sides?



Hexagon

How many sides?



Rectangle
Opposite sides are equal