
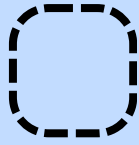


Addition - Sums to 5

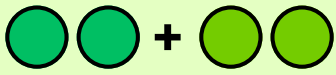
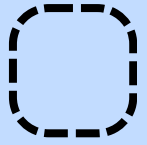
Instruction: Solve each Addition. Write the answer in the box.




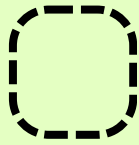
$2 + 1 =$



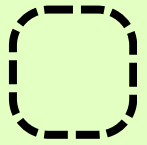
$0 + 4 =$




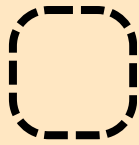
$2 + 2 =$



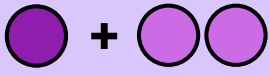
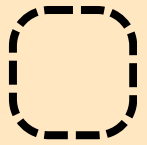
$3 + 2 =$





$3 + 1 =$




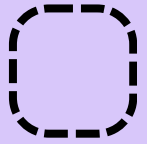
$2 + 0 =$



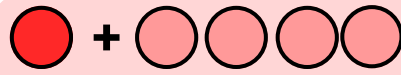
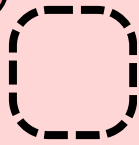
$1 + 2 =$



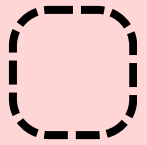
$5 + 0 =$




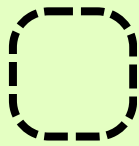
$4 + 1 =$



$1 + 4 =$



$1 + 3 =$



$0 + 1 =$

