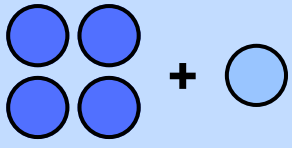
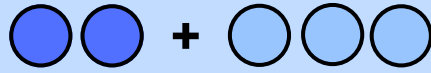


# Addition Sums to 10

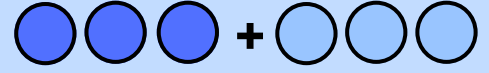
**Instruction:** Solve each Addition. Write the answer in the box.



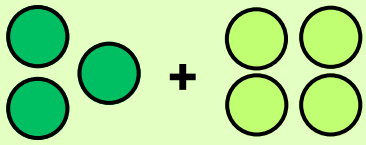
$$4 + 1 = \square$$



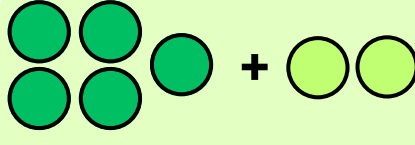
$$2 + 3 = \square$$



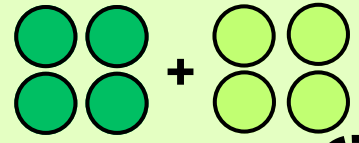
$$3 + 3 = \square$$



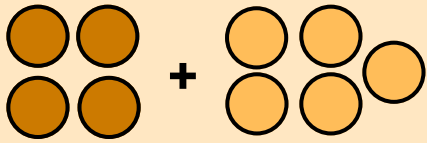
$$3 + 4 = \square$$



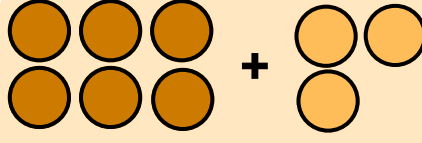
$$5 + 2 = \square$$



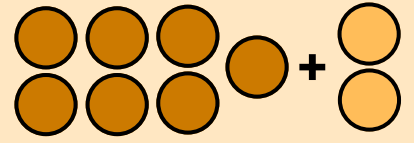
$$4 + 4 = \square$$



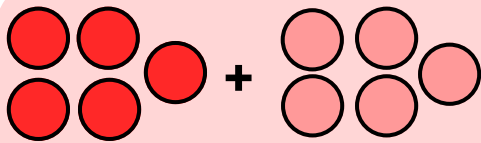
$$4 + 5 = \square$$



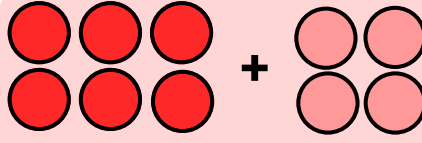
$$6 + 3 = \square$$



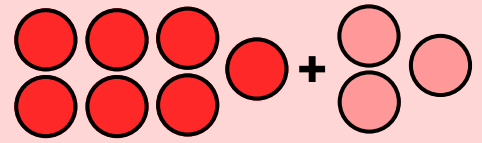
$$7 + 2 = \square$$




$$5 + 5 = \square$$



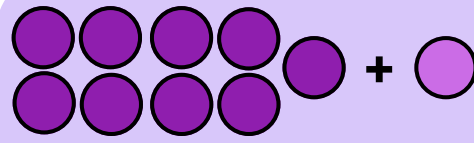
$$6 + 4 = \square$$




$$7 + 3 = \square$$



$$8 + 1 = \square$$



$$9 + 1 = \square$$



$$2 + 8 = \square$$