



Student Name: _____

Obtain Marks: _____

Make Pairs - Odd or Even?









Draw lines to make pairs. Write the number. Circle odd or even.

				_____	Odd	Even
--	---	---	---	-------	------------	-------------

				_____	Odd	Even
--	---	---	--	-------	------------	-------------

						
				_____	Odd	Even

						
				_____	Odd	Even

						
				_____	Odd	Even

						
				_____	Odd	Even