




Student Name: \_\_\_\_\_

Obtain Marks: \_\_\_\_\_

## Count the Sides

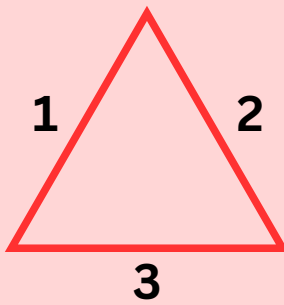
**Instruction:** Count the sides of each shape. Write the number in the box.

How many sides?



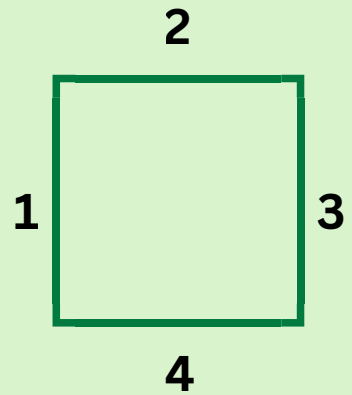
**Circle**  
No straight lines

How many sides?



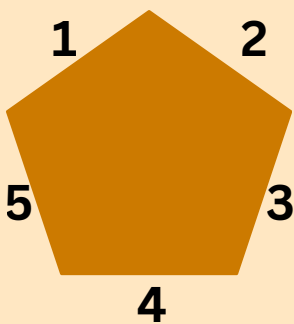
**Triangle**  
All 3 sides are equal

How many sides?



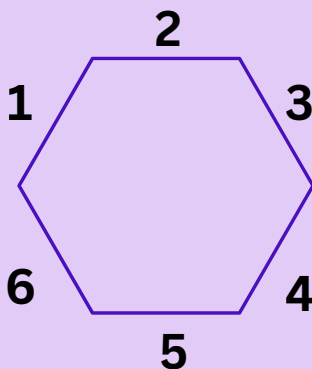
**Square**  
All 4 sides are equal

How many sides?



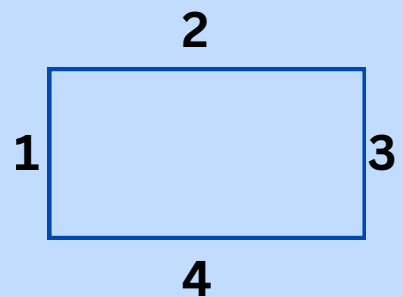
**Pentagon**

How many sides?



**Hexagon**

How many sides?



**Rectangle**  
Opposite sides are equal