













Student Name: _____

Obtain Marks: _____

2D Geometric shapes

Instruction: Look at the pictures and circle the correct words

 <input type="text" value="Trapezium"/> <input type="text" value="Triangle"/>	 <input type="text" value="Hexagon"/> <input type="text" value="Trapezium"/>
 <input type="text" value="Oval"/> <input type="text" value="Circle"/>	 <input type="text" value="Heptagon"/> <input type="text" value="Octagon"/>
 <input type="text" value="Square"/> <input type="text" value="Rectangle"/>	 <input type="text" value="Star"/> <input type="text" value="Moon"/>
 <input type="text" value="Rhombus"/> <input type="text" value="Rectangle"/>	 <input type="text" value="Moon"/> <input type="text" value="Heart"/>
 <input type="text" value="Pentagon"/> <input type="text" value="Hexagon"/>	 <input type="text" value="Circle"/> <input type="text" value="Oval"/>